


EFTER AVSNITT 1.6

Namn: _____





1 a) $\frac{37,1}{10} =$ _____

b) $164,8 / 10 =$ _____

c) $\frac{45}{100} =$ _____

2 Vera köper fyra grapefrukter för 38 kr. Vad kostar de per styck?

3 a) $50 \cdot 700 =$ _____ b) $\frac{372}{60} =$ _____ c) $3,1 \cdot 400 =$ _____

**4** Johannes köper 20 kg potatis i en säck. Potatisen kostar 8,90 kr per kilogram. Vad får Johannes betala för potatisen?

5 a) $5,3 \cdot 15 =$ _____ b) $24 \cdot 36 =$ _____ c) $38 \cdot 1,7 =$ _____

