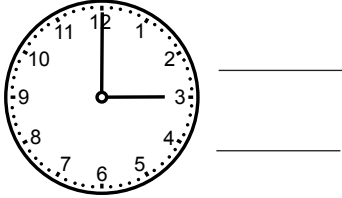


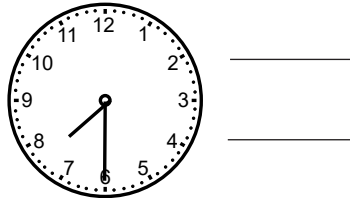
### Kan du klockan? (I)

Skriv två klockslag till varje bild.

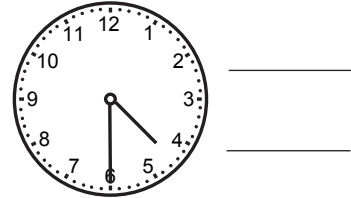
1



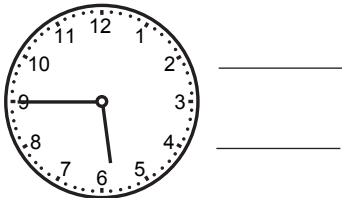
2




3




4



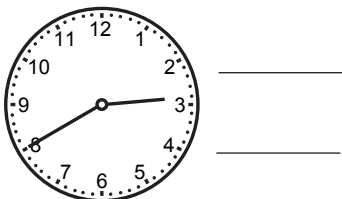
5



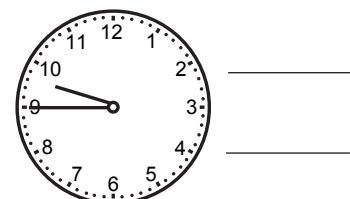
6



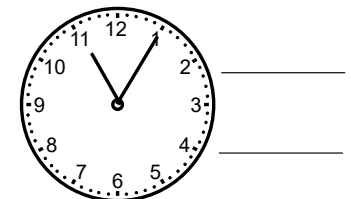
7



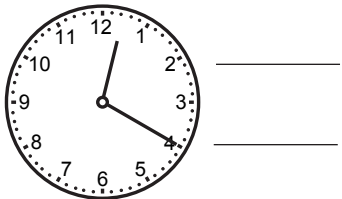
8



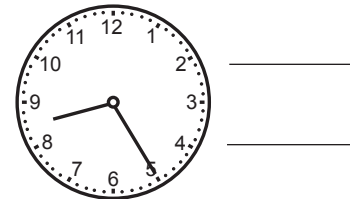
9



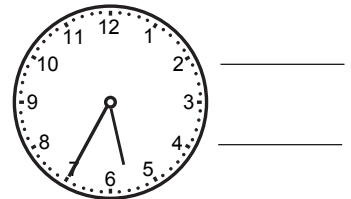
10



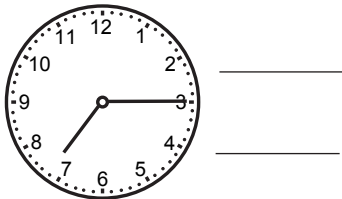
11



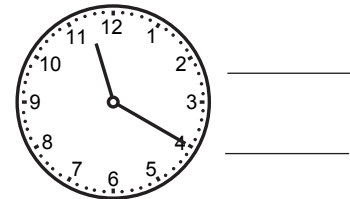
12



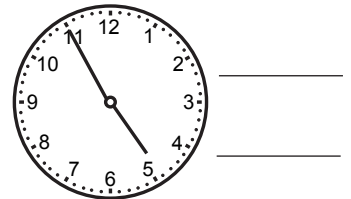
13



14



15



## Kan du klockan? (I)

**FACIT**

- 1 03.00 och 15.00
- 2 07.30 och 19.30
- 3 04.30 och 16.30
- 4 05.45 och 17.45
- 5 01.10 och 13.10
- 6 03.50 och 15.50
- 7 02.40 och 14.40
- 8 09.45 och 21.45
- 9 11.05 och 23.05
- 10 00.20 och 12.20
- 11 08.25 och 20.25
- 12 05.35 och 17.35
- 13 07.15 och 19.15
- 14 11.20 och 23.20
- 15 04.55 och 16.55