


## Hur mycket är klockan?


Skriv två klockslag till varje bild.

1




\_\_\_\_\_

2




\_\_\_\_\_

3




\_\_\_\_\_

4




\_\_\_\_\_

5




\_\_\_\_\_

6




\_\_\_\_\_

7




\_\_\_\_\_

8




\_\_\_\_\_

9



\_\_\_\_\_

10



\_\_\_\_\_

## Hur mycket är klockan?

**FACIT**

1 03.40  
15.40

2 02.25  
14.25

3 01.50  
13.50

4 05.05  
17.05

5 05.52  
17.52

6 01.14  
13.14

7 09.07  
21.07

8 11.53  
23.53

9 07.38  
19.38

10 07.23  
19.23