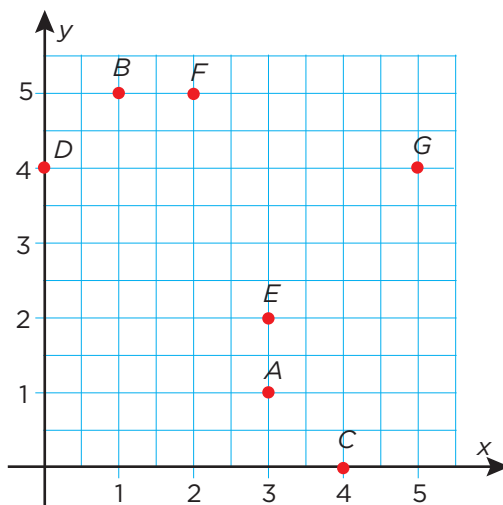


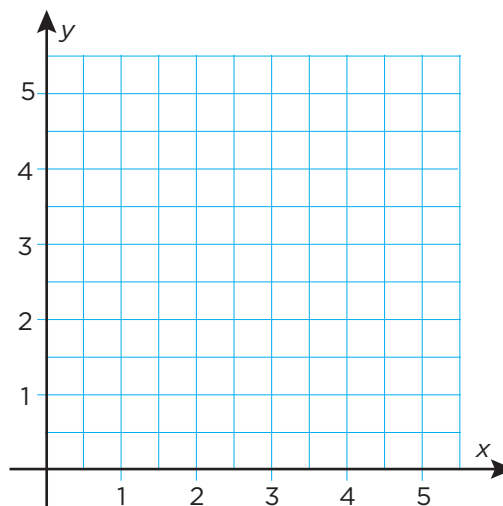
Koordinatsystemet

1 Vilka koordinater har punkterna?



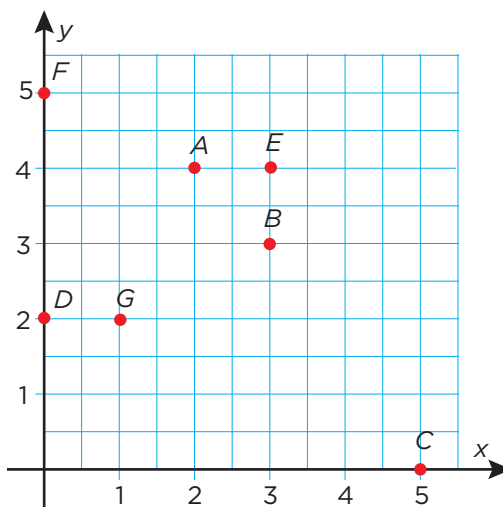
- A: _____
- B: _____
- C: _____
- D: _____
- E: _____
- F: _____
- G: _____

2 Sätt ut dessa punkter i koordinatsystemet.



- A: (1, 4)
- B: (2, 5)
- C: (0, 3)
- D: (5, 0)
- E: (4, 1)
- F: (0, 1)
- G: (0, 0)

3 Vilka koordinater har punkterna?



- A: _____
- B: _____
- C: _____
- D: _____
- E: _____
- F: _____
- G: _____

Koordinatsystemet

FACIT

1 A: (3, 1)

B: (1, 5)

C: (4, 0)

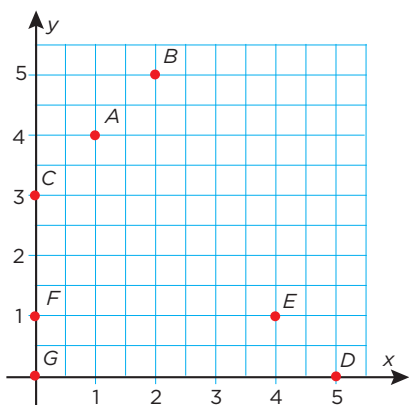
D: (0, 4)

E: (3, 2)

F: (2, 5)

G: (5, 4)

2



3 A: (2, 4)

B: (3, 3)

C: (5, 0)

D: (0, 2)

E: (3, 4)

F: (0, 5)

G: (1, 2)