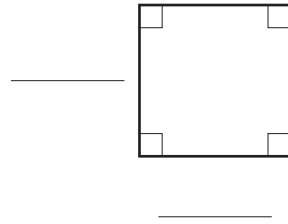


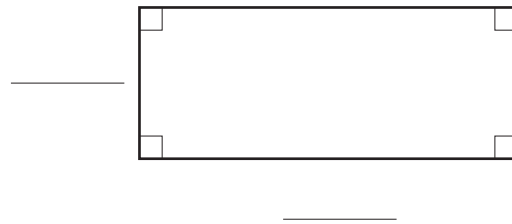
Area

Mät i hela och halva centimeter. Beräkna sedan arean.

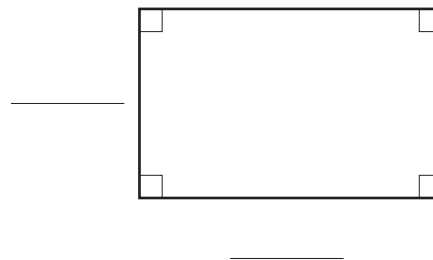
1 Area: _____



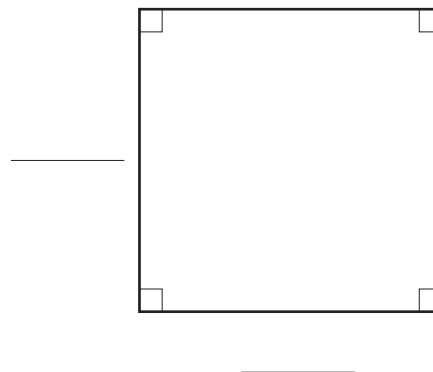
2 Area: _____




3 Area: _____



4 Area: _____



5 Area: _____



Area

FACIT

- 1 4 cm^2
- 2 10 cm^2
- 3 10 cm^2
- 4 16 cm^2
- 5 $7,5 \text{ cm}^2$