


Bråkform och blandad form

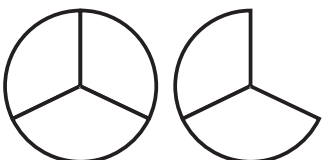
1



Blandad form: _____

Bråkform: _____

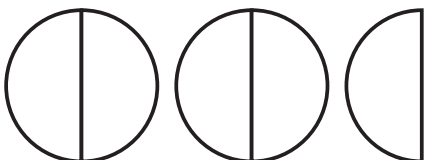
2



Blandad form: _____

Bråkform: _____


3



Blandad form: _____

Bråkform: _____

4



Blandad form: _____

Bråkform: _____

Skriv i bråkform.

5 a) $2\frac{2}{5} = \text{_____}$

b) $1\frac{3}{4} = \text{_____}$

c) $3\frac{1}{2} = \text{_____}$

6 a) $1\frac{7}{8} = \text{_____}$

b) $4\frac{1}{4} = \text{_____}$

c) $1\frac{4}{5} = \text{_____}$

7 a) $2\frac{5}{6} = \text{_____}$

b) $3\frac{2}{7} = \text{_____}$

c) $4\frac{3}{8} = \text{_____}$

Skriv i blandad form.

8 a) $\frac{3}{2} = \text{_____}$

b) $\frac{12}{5} = \text{_____}$

c) $\frac{11}{3} = \text{_____}$

9 a) $\frac{15}{4} = \text{_____}$

b) $\frac{8}{3} = \text{_____}$

c) $\frac{11}{2} = \text{_____}$

10 a) $\frac{13}{4} = \text{_____}$

b) $\frac{23}{5} = \text{_____}$

c) $\frac{19}{6} = \text{_____}$

FACIT

Bråkform och blandad form

- 1 Blandad form: $1\frac{1}{4}$
Bråkform: $\frac{5}{4}$
- 2 Blandad form: $1\frac{2}{3}$
Bråkform: $\frac{5}{3}$
- 3 Blandad form: $2\frac{1}{2}$
Bråkform: $\frac{5}{2}$
- 4 Blandad form: $2\frac{3}{5}$
Bråkform: $\frac{13}{5}$
- 5 a) $\frac{12}{5}$
b) $\frac{7}{4}$
c) $\frac{7}{2}$
- 6 a) $\frac{15}{8}$
b) $\frac{17}{4}$
c) $\frac{9}{5}$
- 7 a) $\frac{17}{6}$
b) $\frac{23}{7}$
c) $\frac{35}{8}$
- 8 a) $1\frac{1}{2}$
b) $2\frac{2}{5}$
c) $3\frac{2}{3}$
- 9 a) $3\frac{3}{4}$
b) $2\frac{2}{3}$
c) $5\frac{1}{2}$
- 10 a) $3\frac{1}{4}$
b) $4\frac{3}{5}$
c) $3\frac{1}{6}$