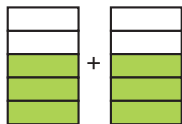


Addition och subtraktion av bråk (I)

1 Skriv med siffror de beräkningar som bilderna visar och räkna ut svaret.

a) _____



b) _____



2 a) $\frac{2}{3} + \frac{2}{3} =$ _____

b) $\frac{3}{5} + \frac{4}{5} =$ _____

3 a) $1\frac{1}{3} - \frac{2}{3} =$ _____

b) $1\frac{4}{5} - \frac{2}{5} =$ _____

4 a) $\frac{5}{6} + \frac{2}{6} =$ _____

b) $\frac{8}{9} + \frac{3}{9} =$ _____

5 a) $2\frac{3}{4} - 1\frac{2}{4} =$ _____

b) $2\frac{2}{4} - 1\frac{3}{4} =$ _____

6 a) $\frac{7}{10} + \frac{4}{10} =$ _____

b) $1\frac{3}{8} - \frac{6}{8} =$ _____

7 a) $3\frac{1}{6} - 2\frac{2}{6} =$ _____




b) $\frac{5}{9} + \frac{5}{9} + \frac{1}{9} =$ _____

8 Vilket tal är x ?

a) $x + \frac{5}{6} = 1\frac{4}{6}$

b) $x - \frac{4}{5} = \frac{4}{5}$

c) $\frac{3}{7} + x = 2\frac{1}{7}$



FACIT

Addition och subtraktion av bråk (I)

1 a) $\frac{3}{5} + \frac{3}{5} = \frac{6}{5} = 1\frac{1}{5}$

b) $1\frac{2}{3} - \frac{1}{3} = 1\frac{1}{3}$

2 a) $1\frac{1}{3}$

b) $1\frac{2}{5}$

3 a) $\frac{2}{3}$

b) $1\frac{2}{5}$

4 a) $1\frac{1}{6}$

b) $1\frac{2}{9}$

5 a) $1\frac{1}{4}$

b) $\frac{3}{4}$

6 a) $1\frac{1}{10}$

b) $\frac{5}{8}$

7 a) $\frac{5}{6}$

b) $1\frac{2}{9}$

8 a) $x = \frac{5}{6}$

b) $x = 1\frac{3}{5}$

c) $x = 1\frac{5}{7}$