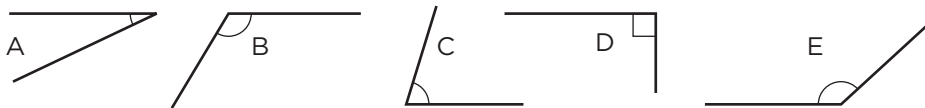


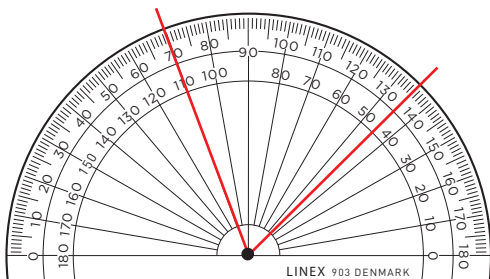
## Vinklar (I)

1 Vilken eller vilka vinklar är

a) spetsiga \_\_\_\_\_ b) räta \_\_\_\_\_ c) trubbiga \_\_\_\_\_

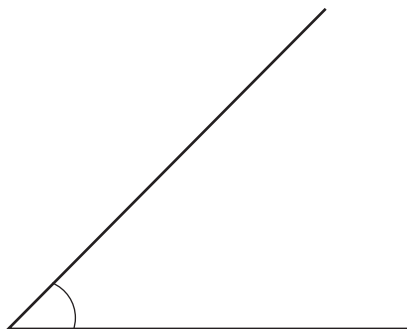


2 Hur stor är vinkeln? \_\_\_\_\_




Mät vinklarna. Graddtalen ska sluta på 0 eller 5.

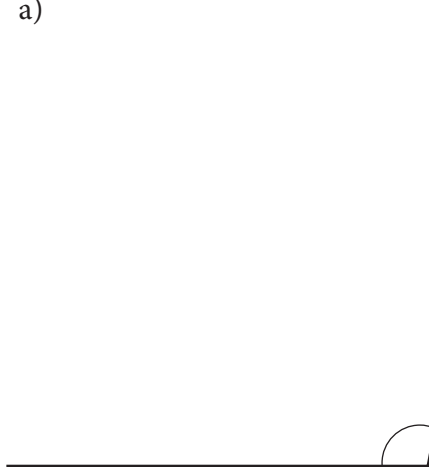
3 a)



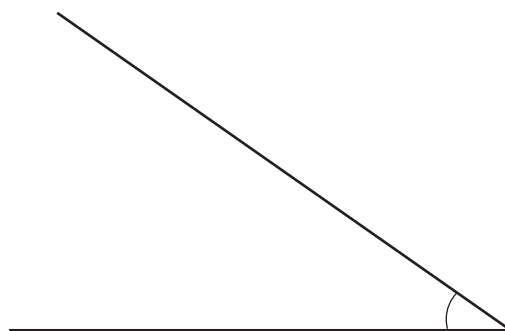
b)



4 a)



b)



**FACIT****Vinklar (I)**

- 1 a) A och C  
b) D  
c) B och E
- 2  $65^\circ$
- 3 a)  $45^\circ$   
b)  $135^\circ$
- 4 a)  $100^\circ$   
b)  $35^\circ$