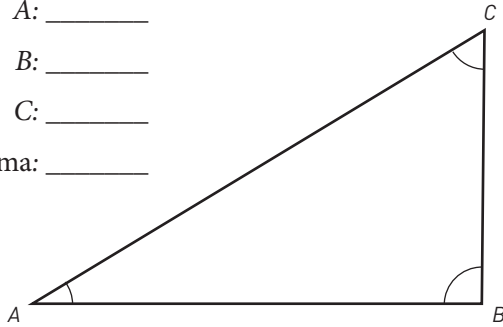


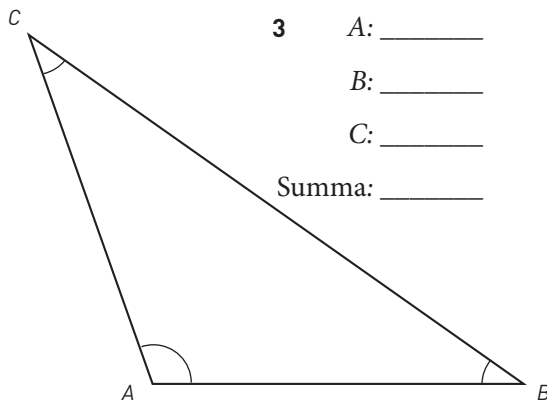
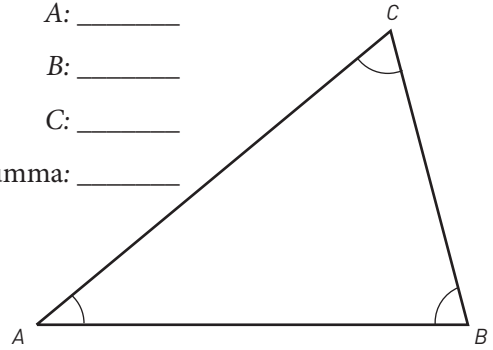
Vinkelsumman i trianglar

Mät trianglarnas vinklar. Gradtalen ska sluta på 0 eller 5. Addera sedan gradtalen.

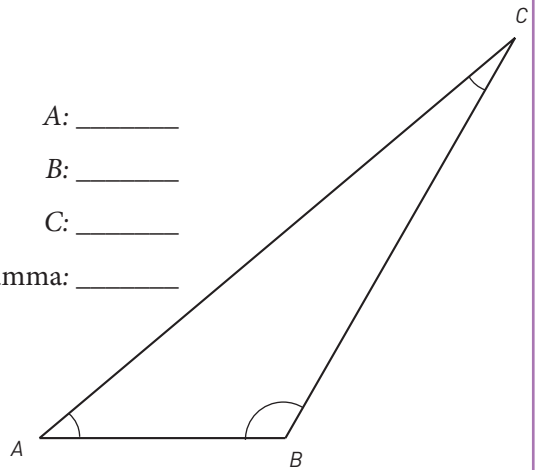
- 1 A: _____
 B: _____
 C: _____
 Summa: _____



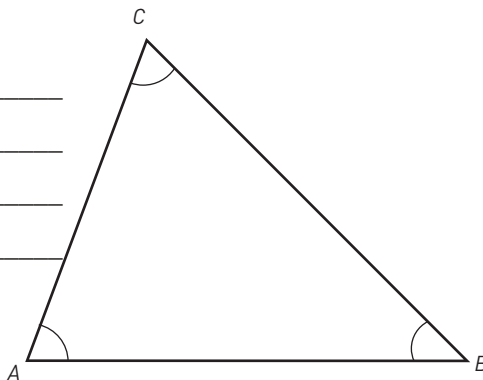
- 2 A: _____
 B: _____
 C: _____
 Summa: _____



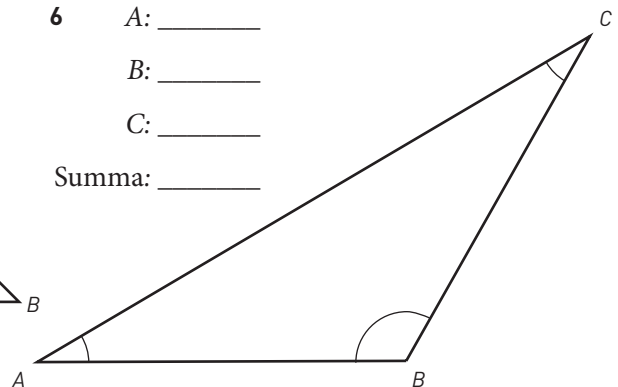
- 4 A: _____
 B: _____
 C: _____
 Summa: _____



- 5 A: _____
 B: _____
 C: _____
 Summa: _____



- 6 A: _____
 B: _____
 C: _____
 Summa: _____



FACIT

Vinkelsumman i trianglar

- 1 A: 30°
B: 90°
C: 60°
Summa: 180°
- 2 A: 40°
B: 75°
C: 65°
Summa: 180°
- 3 A: 110°
B: 35°
C: 35°
Summa: 180°
- 4 A: 40°
B: 120°
C: 20°
Summa: 180°
- 5 A: 70°
B: 45°
C: 65°
Summa: 180°
- 6 A: 30°
B: 120°
C: 30°
Summa: 180°