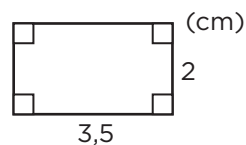


Omkrets och area (I)

Beräkna omkrets och area.

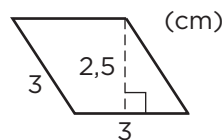
1 Omkrets: _____

Area: _____



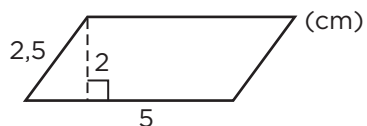
2 Omkrets: _____

Area: _____



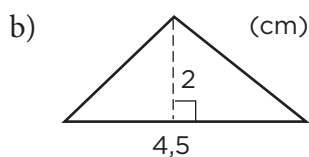
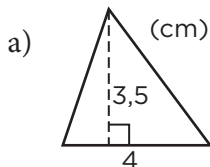


3 Omkrets: _____

Area: _____



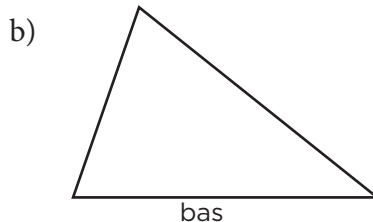
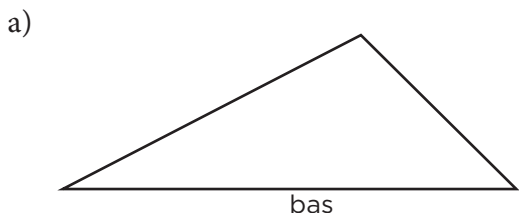


4 Beräkna arean av trianglarna.



5 Dra höjden mot den sida som kallas bas.

Mät i hela och halva centimeter och beräkna trianglarnas area.



FACIT**Omkrets och area (I)**

1 O: 11 cm

A: 7 cm^2

2 O: 12 cm

A: $7,5 \text{ cm}^2$

3 O: 15 cm

A: 10 cm^2

4 a) 7 cm^2

b) $4,5 \text{ cm}^2$

5 a) 6 cm^2

b) 5 cm^2